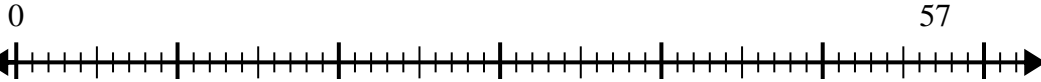




Use the number line to solve the division problem.

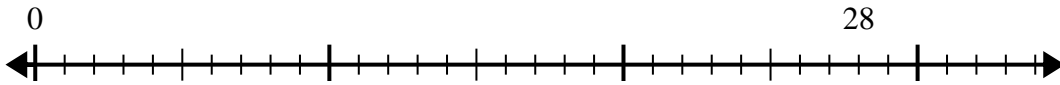
Answers

1) $57 \div 7 =$



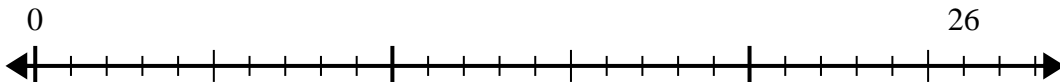
1. _____

2) $28 \div 8 =$



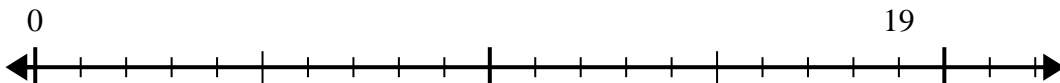
2. _____

3) $26 \div 4 =$



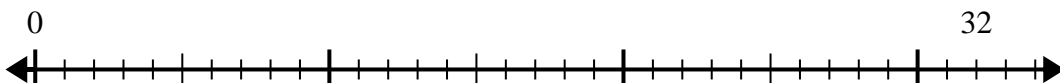
3. _____

4) $19 \div 6 =$



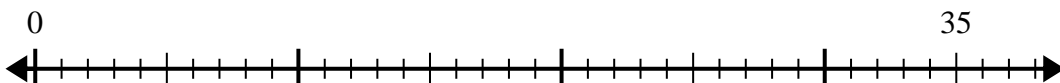
4. _____

5) $32 \div 6 =$



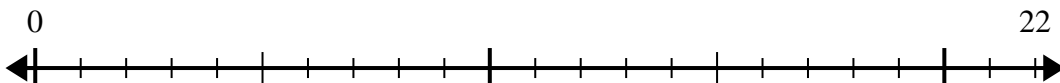
5. _____

6) $35 \div 8 =$



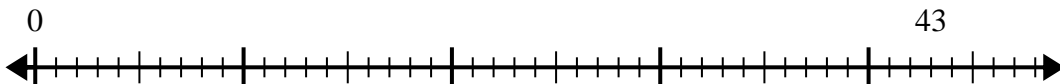
6. _____

7) $22 \div 5 =$



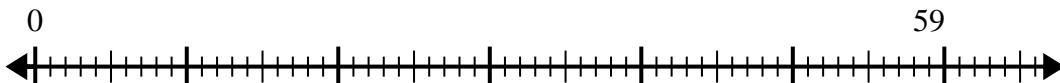
7. _____

8) $43 \div 6 =$



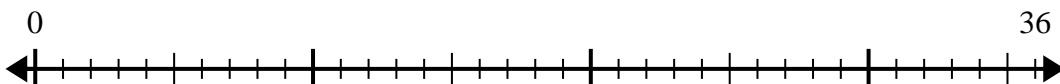
8. _____

9) $59 \div 8 =$



9. _____

10) $36 \div 7 =$

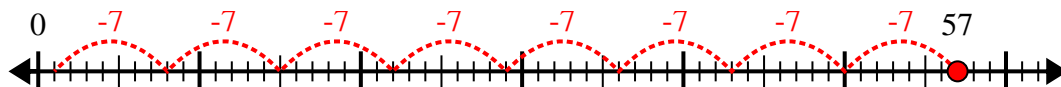


10. _____

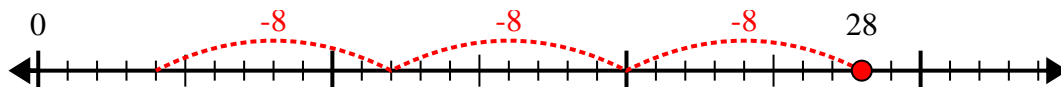


Use the number line to solve the division problem.

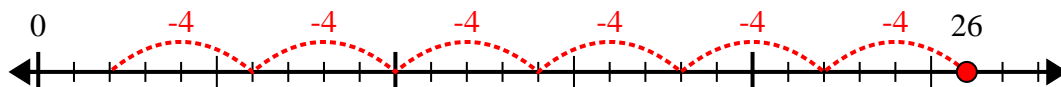
1) $57 \div 7 =$



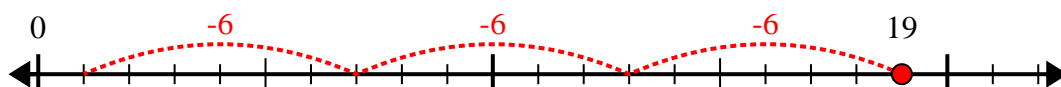
2) $28 \div 8 =$



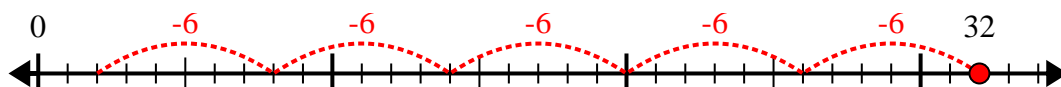
3) $26 \div 4 =$



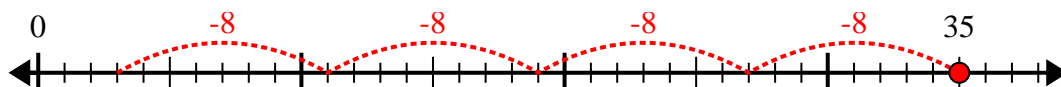
4) $19 \div 6 =$



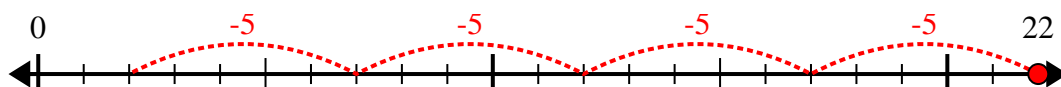
5) $32 \div 6 =$



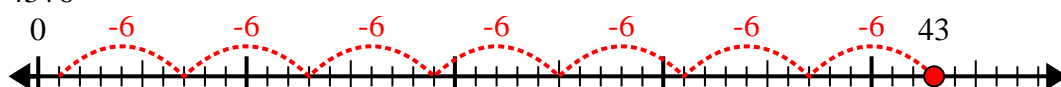
6) $35 \div 8 =$



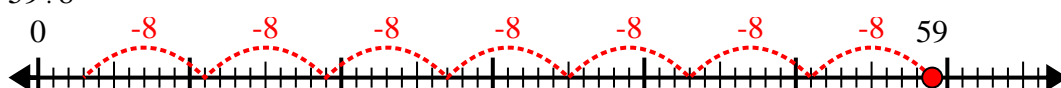
7) $22 \div 5 =$



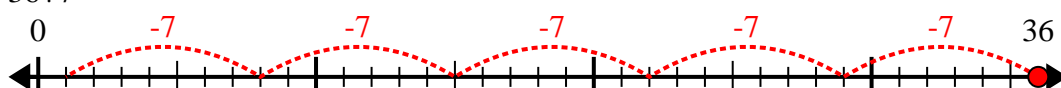
8) $43 \div 6 =$



9) $59 \div 8 =$



10) $36 \div 7 =$



Answers

1. 8r1

2. 3r4

3. 6r2

4. 3r1

5. 5r2

6. 4r3

7. 4r2

8. 7r1

9. 7r3

10. 5r1